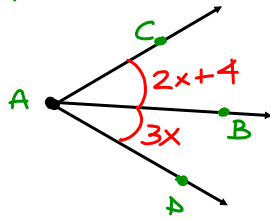
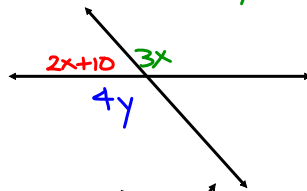


Quiz 1.5 and 1.6 Review

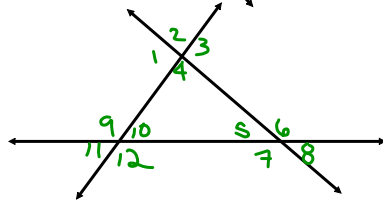
1.)  $\vec{AB}$  bisect  $\angle CAD$ . Find  $x$ .



2.) Find  $x$  and  $y$ .

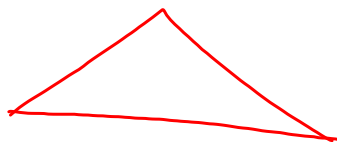


3.)



- Name a vertical  $\angle$ .
- Name a Linear Pair.
- Name an adjacent Pair.

4.) Is the figure a polygon? If yes, Concave or Convex



5. What does it mean to be a REGULAR POLYGON?